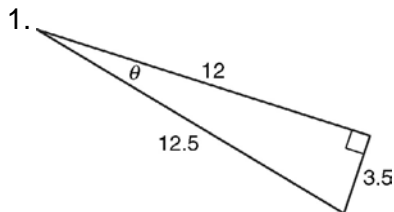
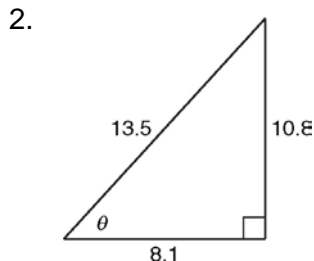


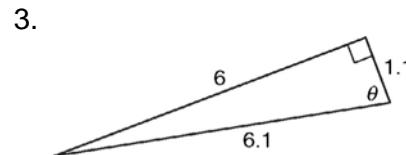
LESSON
10-1

Practice C
Right-Angle Trigonometry

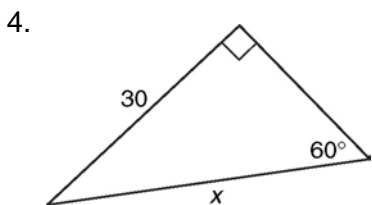
Find the value of the sine, cosine, and tangent functions for θ .

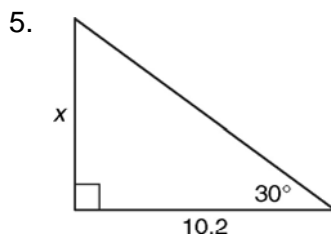


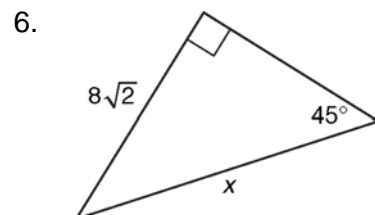




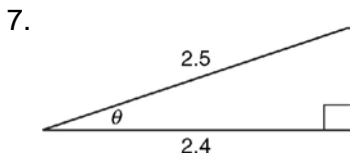
Use a trigonometric function to find the value of x .

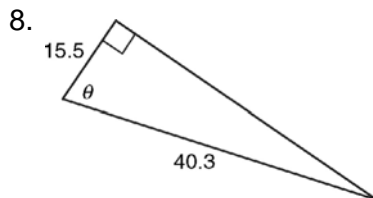


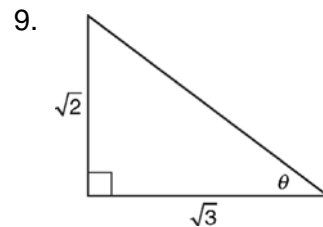




Find the values of the six trigonometric functions for θ .







Solve.

10. A kite string is 102 feet long. The angle between the kite string and the ground is 54.9° . How high is the kite?

11. A surveyor stands 186 feet from the base of a cliff and measures the angle of elevation to be 56.6° . His eye level is 5 feet above the ground. What is the height of the cliff to the nearest foot?

12. The pilot of a hot air balloon measures the angle of depression to a landing spot to be 36.7° . If the pilot's altitude is 1752 meters, what is the horizontal distance to the landing spot to the nearest meter?

10-1 RIGHT-ANGLE TRIGONOMETRY

Practice A

1. a. $\sin \theta = \frac{48}{50} = \frac{24}{25}$

b. $\cos \theta = \frac{14}{50} = \frac{7}{25}$

c. $\tan \theta = \frac{48}{14} = \frac{24}{7}$

2. $\frac{3}{5}, \frac{4}{5}, \frac{3}{4}$

3. $\frac{9}{41}, \frac{40}{41}, \frac{9}{40}$

4. $\frac{12}{13}, \frac{5}{13}, \frac{12}{5}$

5.a. Cosine

b. $\cos 45^\circ = \frac{x}{12\sqrt{2}}$

c. $\cos 45^\circ = \frac{\sqrt{2}}{2}$

d. $x = 12$

6. 10

7. 8

8. 9

9. 45 ft

Practice B

1. $\frac{4}{5}, \frac{3}{5}, \frac{4}{3}$

2. $\frac{9}{41}, \frac{40}{41}, \frac{9}{40}$

3. $\frac{12}{13}, \frac{5}{13}, \frac{12}{5}$

4. $6\sqrt{3}$

5. $\frac{44\sqrt{3}}{3}$

6. 7

7. $\sin \theta = \frac{12}{13}; \cos \theta = \frac{5}{13}; \tan \theta = \frac{12}{5}$

$\csc \theta = \frac{13}{12}; \sec \theta = \frac{13}{5}; \cot \theta = \frac{5}{12}$

8. $\sin \theta = \frac{3}{5}; \cos \theta = \frac{4}{5}; \tan \theta = \frac{3}{4}$

$\csc \theta = \frac{5}{3}; \sec \theta = \frac{5}{4}; \cot \theta = \frac{4}{3}$

9. $\sin \theta = \frac{9}{41}; \cos \theta = \frac{40}{41}; \tan \theta = \frac{9}{40}$

$\csc \theta = \frac{41}{9}; \sec \theta = \frac{41}{40}; \cot \theta = \frac{40}{9}$

10. 47 ft

11. 162 ft

12. 4817 m

Practice C

1. $\frac{7}{25}, \frac{24}{25}, \frac{7}{24}$

2. $\frac{4}{5}, \frac{3}{5}, \frac{4}{3}$

3. $\frac{60}{61}, \frac{11}{61}, \frac{60}{11}$

4. $20\sqrt{3}$

5. $3.4\sqrt{3}$

6. 16

7. $\sin \theta = \frac{7}{25}; \cos \theta = \frac{24}{25};$

$\tan \theta = \frac{7}{24}; \csc \theta = \frac{25}{7};$

$\sec \theta = \frac{25}{24}; \cot \theta = \frac{24}{7}$

8. $\sin \theta = \frac{12}{13}; \cos \theta = \frac{5}{13};$

$\tan \theta = \frac{12}{5}; \csc \theta = \frac{13}{12};$

$\sec \theta = \frac{13}{5}; \cot \theta = \frac{5}{12}$

9. $\sin \theta = \frac{\sqrt{10}}{5}; \cos \theta = \frac{\sqrt{15}}{5};$

$\tan \theta = \frac{\sqrt{6}}{3}; \csc \theta = \frac{\sqrt{10}}{2};$

$\sec \theta = \frac{\sqrt{15}}{3}; \cot \theta = \frac{\sqrt{6}}{2}$

10. 83.5 ft

11. 287 ft

12. 2350 m

Reteach

1. $\frac{3}{5}$ $\frac{4}{5}$ $\frac{3}{4}$

2. $\frac{12}{13}$ $\frac{5}{13}$ $\frac{12}{5}$

3. $\frac{8}{17}$ $\frac{15}{17}$ $\frac{8}{15}$